

Centre No.						Paper Reference					Surname	Initial(s)		
Candidate No.						5	5	2	3	/	0	3	Signature	

Paper Reference(s)  
**5523/03**

**Edexcel GCSE  
Mathematics A – 1387  
Paper 3 (Non-Calculator)**



Examiner's use only		
Team Leader's use only		

**Intermediate Tier**

Tuesday 7 November 2006 – Morning  
Time: 2 hours



ND003655546

**Materials required for examination**

Ruler graduated in centimetres and millimetres, protractor, compasses, pen, HB pencil, eraser.  
Tracing paper may be used.

**Items included with question papers**

Nil

**Instructions to Candidates**

In the boxes above, write your centre number, candidate number, your surname, initials and signature. Check that you have the correct question paper. Answer ALL the questions. Write your answers in the spaces provided in this question paper. **You must NOT write on the formulae page. Anything you write on the formulae page will gain NO credit.** If you need more space to complete your answer to any question, use additional answer sheets.

**Information for Candidates**

The marks for individual questions and the parts of questions are shown in round brackets: e.g. (2). There are 26 questions in this question paper. The total mark for this paper is 100. There are 20 pages in this question paper. Any blank pages are indicated. **Calculators must not be used.**

**Advice to Candidates**

Show all stages in any calculations. Work steadily through the paper. Do not spend too long on one question. If you cannot answer a question, leave it and attempt the next one. Return at the end to those you have left out.

This publication may be reproduced only in accordance with Edexcel Limited copyright policy. ©2006 Edexcel Limited.

Printer's Log No.  
**N24949A**

W850/RS523/57570 6/6/6/4/4/



N 2 4 9 4 9 A 0 1 2 0

*Turn over*

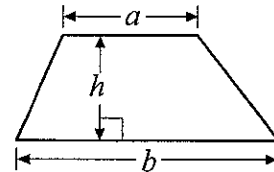
**edexcel**   
advancing learning, changing lives

GCSE Mathematics 1387/8

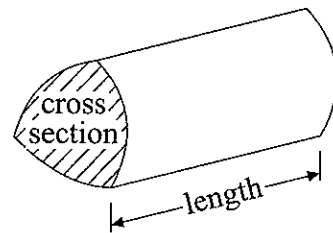
Formulae: Intermediate Tier

**You must not write on this formulae page.  
Anything you write on this formulae page will gain NO credit.**

**Area of trapezium** =  $\frac{1}{2}(a+b)h$



**Volume of prism** = area of cross section  $\times$  length



**Answer ALL TWENTY SIX questions.**

**Write your answers in the spaces provided.**

**You must write down all stages in your working.**

**You must NOT use a calculator.**

1. (a) Work out the value of  $4^2 + 2^5$

.....  
(2)

- (b) Write down the cube root of 64

.....  
(1)

Q1

(Total 3 marks)

2. 70 students each chose one P.E. activity.  
They chose one of basketball or swimming or football.  
The two-way table shows some information about their choices.

	Basketball	Swimming	Football	Total
Female	10			37
Male		17		
Total	19		22	70

- (a) Complete the two-way table.

(3)

One of these students is picked at random.

- (b) Write down the probability that this student chose basketball.

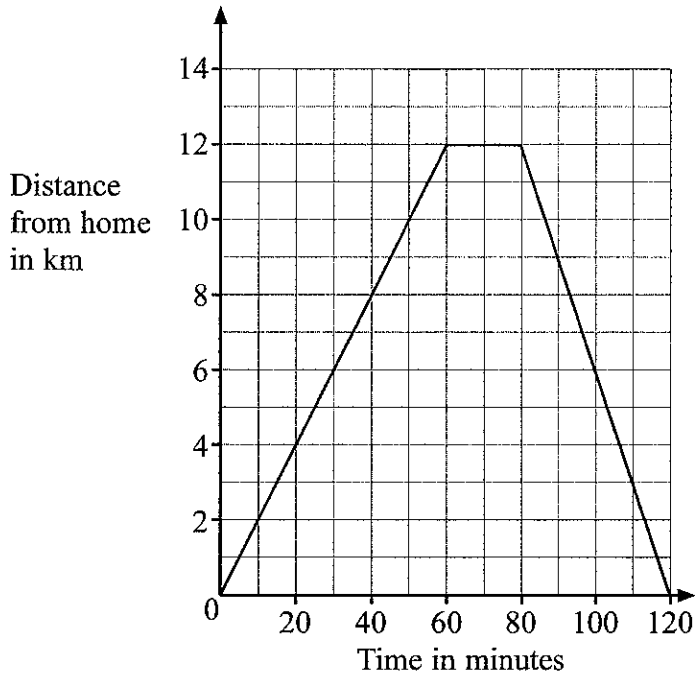
.....  
(2)

Q2

(Total 5 marks)



3. Margaret went on a cycle ride.  
The travel graph shows Margaret's distance from home on this cycle ride.



- (a) How far had Margaret cycled after 30 minutes?

..... km  
(1)

After 60 minutes, Margaret stopped for a rest.

- (b) For how many minutes did she rest?

..... minutes  
(1)

- (c) How far did Margaret cycle in total on her ride?

..... km  
(1)

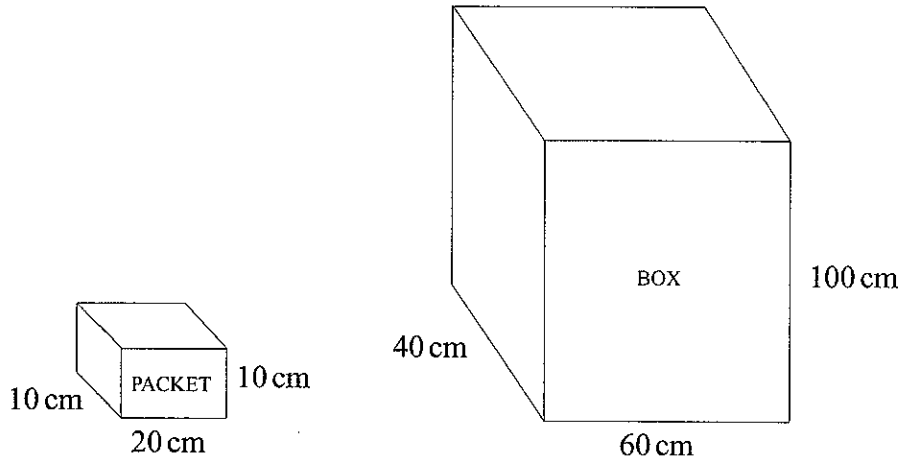
(Total 3 marks)

Q3



4.

Diagrams NOT accurately drawn



A packet measures 10 cm by 20 cm by 10 cm.  
A box measures 40 cm by 60 cm by 100 cm.  
The box is to be completely filled with packets.

Work out the number of packets which can completely fill the box.

.....

(Total 3 marks)

Q4



5. A ream of paper costs £2.69

(a) Work out the cost of 34 reams of paper.

£ .....  
(3)

The weight of a ream of paper is 2.5 kg.  
There are 500 sheets of paper in a ream.

(b) Work out the weight, in grams, of one sheet of paper.

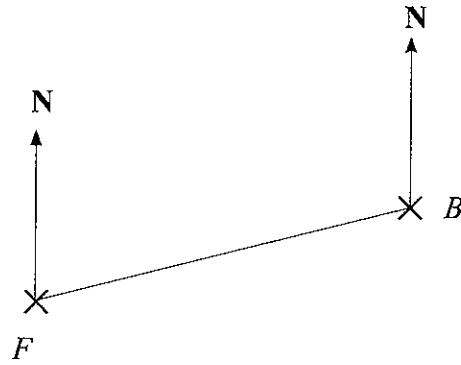
..... g  
(3)

(Total 6 marks)

Q5



6. The diagram shows the position of a farm  $F$  and a bridge  $B$  on a map.



(a) Measure and write down the bearing of  $B$  from  $F$ .

.....<sup>o</sup>  
(1)

A church  $C$  is on a bearing of  $155^\circ$  from the bridge  $B$ .  
On the map, the church is 5 cm from  $B$ .

(b) Mark the church with a cross (x) and label it  $C$ .

(2)

Q6

(Total 3 marks)



7. Here is a list of ingredients for making fudge for 6 people.

**Fudge**

Ingredients for 6 people

600 g of sugar  
12 g of butter  
480 g of condensed milk  
90 ml of milk

Work out how much of each ingredient is needed to make fudge for 9 people.

- ..... g of sugar
- ..... g of butter
- ..... g of condensed milk
- ..... ml of milk

**(Total 3 marks)**

Q7

8. Jill says

“If you multiply any two prime numbers together, the answer will always be an odd number”.

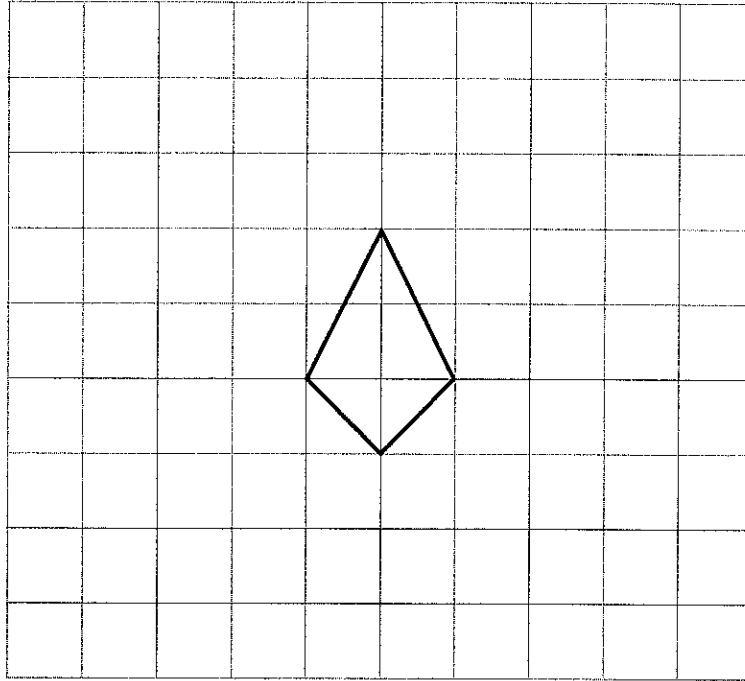
Write down an example to show that Jill is **wrong**.

**(Total 2 marks)**

Q8



9. On the grid, show how this kite will tessellate.  
You should draw at least 8 kites.



Q9

(Total 2 marks)

10. Here are the first five terms of a number sequence.

3    7    11    15    19

- (a) Work out the 8th term of the number sequence.

.....  
(1)

- (b) Write down an expression, in terms of  $n$ , for the  $n$ th term of the number sequence.

.....  
(2)

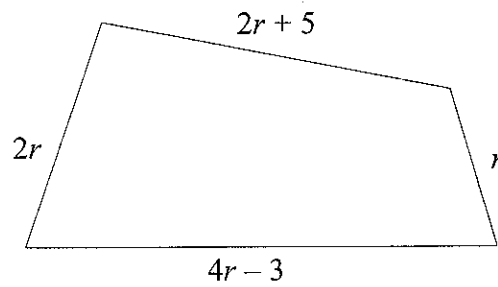
Q10

(Total 3 marks)



11.

Diagram NOT accurately drawn



In the diagram, all measurements are in centimetres.

The lengths of the sides of the quadrilateral are

- $2r + 5$
- $2r$
- $4r - 3$
- $r$

- (a) Find an expression, in terms of  $r$ , for the perimeter of the quadrilateral.  
Give your expression in its simplest form.

.....  
(2)

The perimeter of the quadrilateral is 65 cm.

- (b) Work out the value of  $r$ .

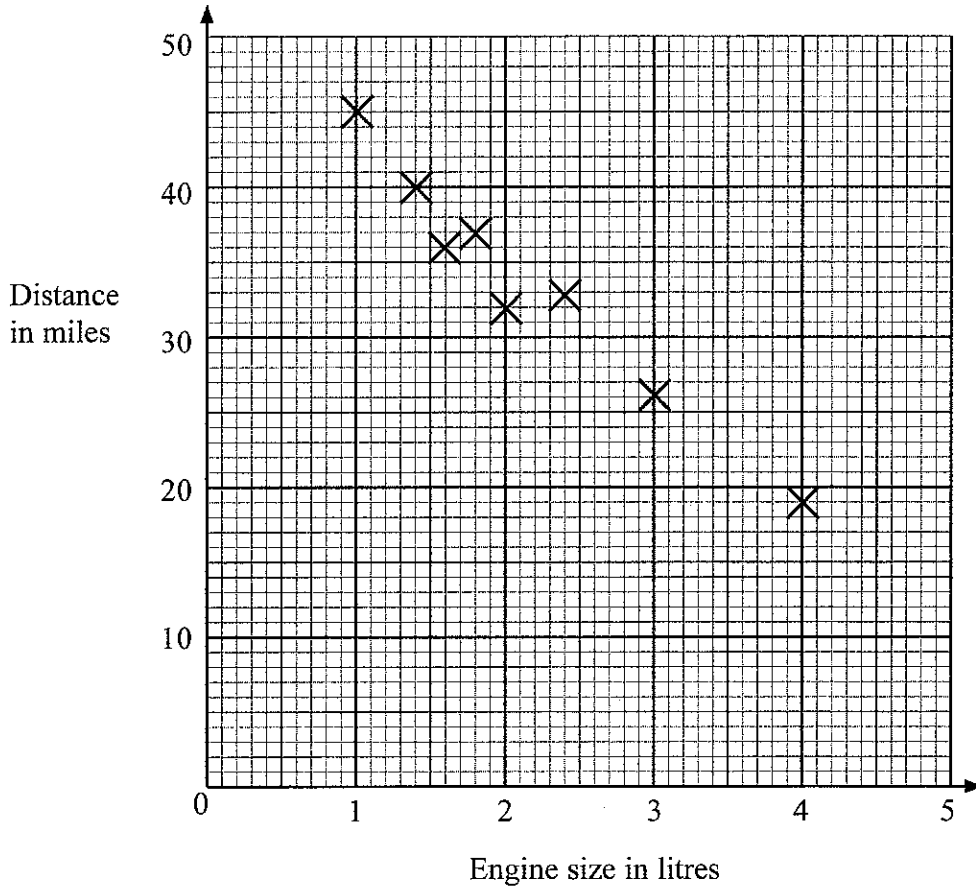
$r =$  .....  
(2)

(Total 4 marks)

Q11



12. The scatter graph shows some information about 8 cars.  
 For each car it shows the engine size, in litres, and the distance, in miles, it travels on one gallon of petrol.



(a) What type of correlation does this scatter graph show?  
 .....

(1)

(b) Draw a line of best fit on the scatter graph.  
 .....

(1)

(c) Use your line of best fit to estimate  
 (i) the distance travelled on one gallon of petrol by a car with an engine size of 3.5 litres,  
 .....

miles

(ii) the engine size of a car that travels a distance of 28 miles on one gallon of petrol.

..... litres  
 (2)

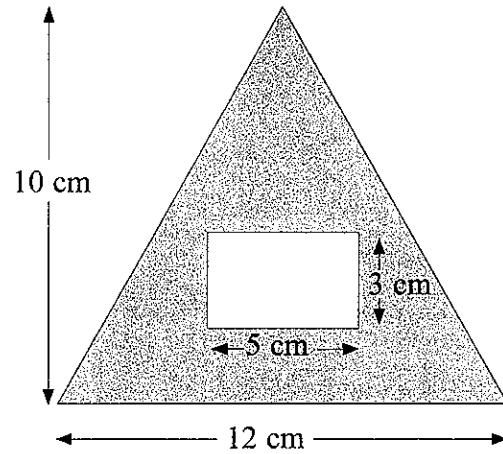
(Total 4 marks)

Q12



13.

Diagram **NOT** accurately drawn



The diagram shows a rectangle inside a triangle.

The triangle has a base of 12 cm and a height of 10 cm.  
The rectangle is 5 cm by 3 cm.

Work out the area of the region shown shaded in the diagram.

..... cm<sup>2</sup>


(Total 3 marks)

Q13



14. Mr Brown buys a garden spade.  
The spade costs £20 plus 17½% VAT.

(a) Calculate the total cost of the spade.

	<p style="text-align: center;"><b>Garden spade</b></p> <p style="text-align: center;"><b>£20 + 17½% VAT</b></p>
---	---

£ .....  
(3)

Mr Brown makes some compost.  
He mixes soil, manure and leaf mould in the ratio 3:1:1

Mr Brown makes 75 litres of compost.

(b) How many litres of soil does he use?

..... litres  
(3)

Mr Brown sows 200 flower seeds.

For each flower seed the probability that it will produce a flower is 0.8

(c) Work out an estimate for the number of these flower seeds that will produce a flower.

.....  
(2)

(Total 8 marks)

Q14



Leave blank

15. Estimate the value of  $\frac{21 \times 3.86}{0.207}$

.....

(Total 3 marks)

Q15

16. The density of concrete is 2.3 grams per  $\text{cm}^3$ .

(a) Work out the mass of a piece of concrete with a volume of  $20 \text{ cm}^3$ .

..... grams  
(2)

480 grams of a cheese has a volume of  $400 \text{ cm}^3$ .

(b) Work out the density of the cheese.

..... grams per  $\text{cm}^3$   
(2)

(Total 4 marks)

Q16



17. (a) Solve  $\frac{y}{4} = 5$

$y = \dots\dots\dots$   
(1)

(b) Factorise  $x^2 + 4x$

$\dots\dots\dots$   
(1)

(c) Simplify

(i)  $m^2 \times m^5$

$\dots\dots\dots$

(ii)  $t^7 \div t^3$

$\dots\dots\dots$   
(2)

(d) Expand and simplify  $(x + 5)(x + 3)$

$\dots\dots\dots$   
(2)

(Total 6 marks)

Q17

18. The table shows some expressions.

Expression	Length	Area	Volume	None of these
$\pi ab$				
$a + 2b$				
$\pi a^2 + b$				

The letters  $a$  and  $b$  represent lengths.  
 $\pi$  and 2 are numbers that have no dimensions.

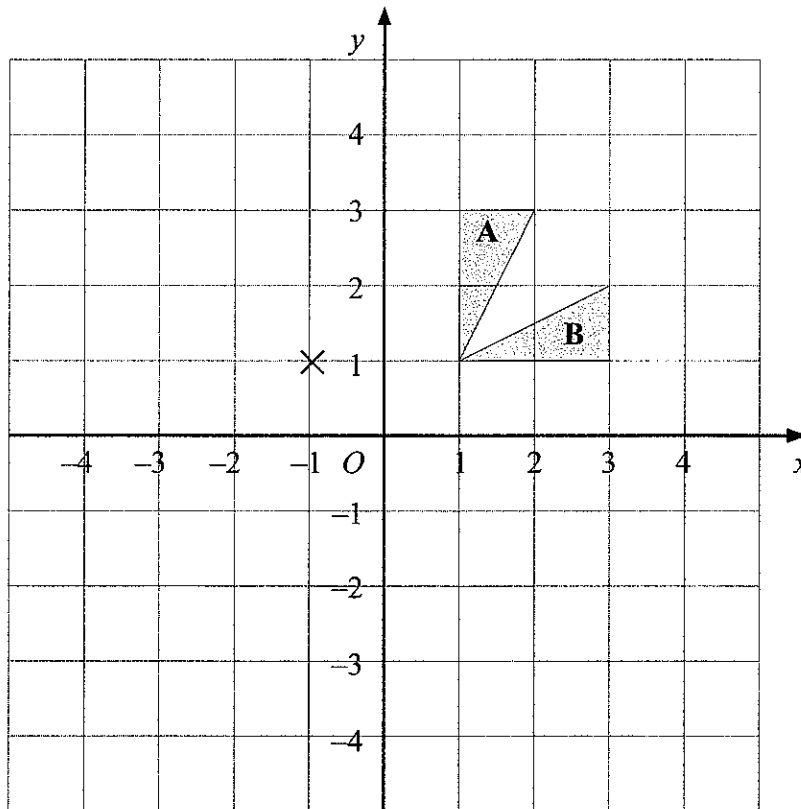
Place a tick ( $\checkmark$ ) in the correct column to show whether the expression can be used to represent a length, an area, a volume or none of these.

(Total 3 marks)

Q18



19.



(a) Describe fully the single transformation that maps triangle A onto triangle B.

..... (2)

(b) On the grid, rotate triangle A 90° anticlockwise about the point (-1, 1)

Label your new triangle C.

(2)

(Total 4 marks)

Q19

20. (a)  $-3 \leq n < 2$

$n$  is an integer.

Write down all the possible values of  $n$ .

..... (2)

(b) Solve the inequality

$$5x < 2x - 6$$

..... (2)

(Total 4 marks)

Q20



21. (a) Work out  $\frac{1}{3} + \frac{3}{5}$

.....  
(2)

(b) Work out  $2\frac{1}{4} \div \frac{3}{5}$

.....  
(3)  
(Total 5 marks)

Q21

22. Solve the simultaneous equations

$$\begin{aligned} 3x - 4y &= 13 \\ 2x + 3y &= 3 \end{aligned}$$

$x =$  .....

$y =$  .....

(Total 4 marks)

Q22



23. (a) Write  $5.7 \times 10^{-4}$  as an ordinary number.

.....  
(1)

(b) Work out the value of  $(7 \times 10^4) \times (3 \times 10^5)$

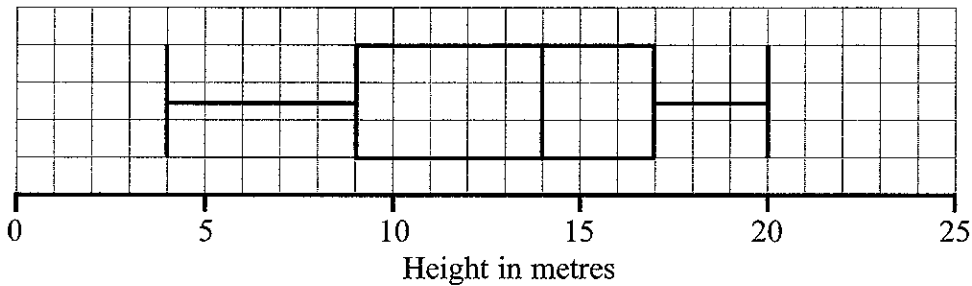
Give your answer in standard form.

.....  
(2)

(Total 3 marks)

Q23

24. The box plot gives information about the distribution of the heights of all the trees in a wood.



(a) Write down the median height of the trees.

..... m  
(1)

(b) Work out the interquartile range of the heights of the trees.

..... m  
(1)

There are 300 trees in the wood.

(c) Work out the number of trees in the wood with a height of 17 m or more.

.....  
(2)

(Total 4 marks)

Q24



25.

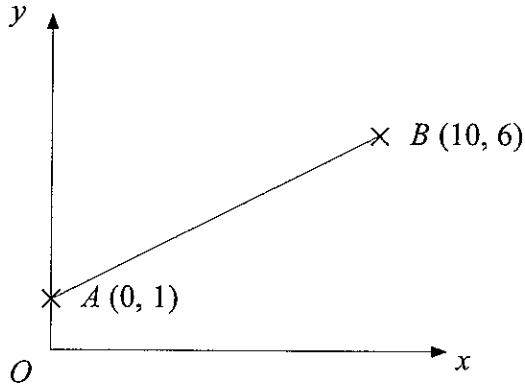


Diagram NOT accurately drawn

$A$  is the point  $(0, 1)$   
 $B$  is the point  $(10, 6)$

(a) Find the coordinates of the midpoint of  $AB$ .

(....., .....)  
 (2)

The equation of the straight line through  $A$  and  $B$  is  $y = \frac{1}{2}x + 1$

(b) Write down the equation of another straight line that is parallel to  $y = \frac{1}{2}x + 1$

.....  
 (1)

(c) Write down the equation of another straight line that passes through the point  $(0, 1)$

.....  
 (1)

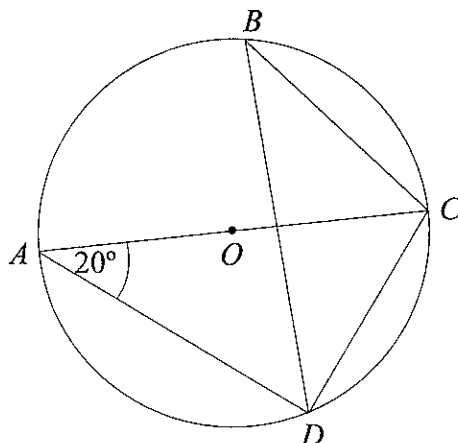
(Total 4 marks)

Q25



26.

Diagram NOT accurately drawn



$A, B, C$  and  $D$  are points on the circumference of a circle, centre  $O$ .  
 $AC$  is a diameter of the circle.

Angle  $DAC = 20^\circ$ .

(a) Find the size of angle  $ACD$ .

.....  
 (2)

(b) Find the size of angle  $DBC$ .  
 Give a reason for your answer.

.....  
 .....  
 .....  
 (2)

(Total 4 marks)

Q26

TOTAL FOR PAPER: 100 MARKS

END

